

QUESTION 3: PERSPECTIVE

Given:

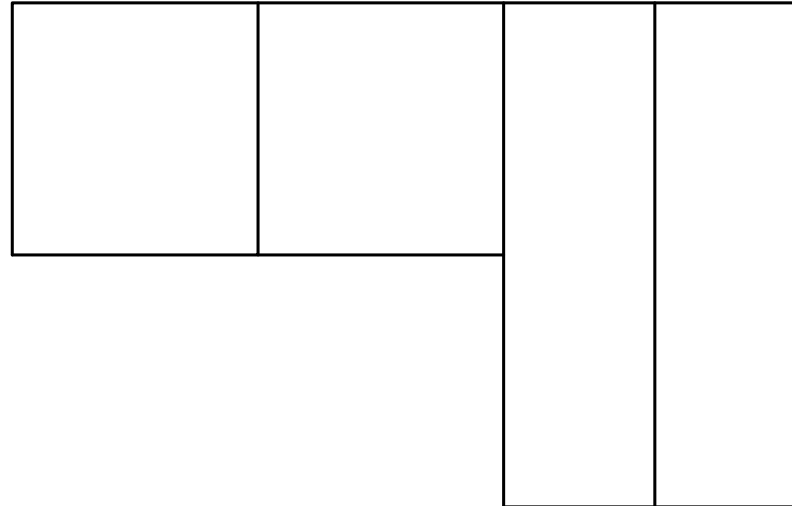
Three views of a block with the information needed to draw a one-point perspective drawing. The front view is not drawn to the correct position for the final completion of the drawing.

The explanation for the abbreviations are as follow:

- PP - Picture plane
- HL - Horizon line
- GL - Ground Line
- SP - Station point

Instructions:

- Use the given information and draw a one-point-perspective drawing.
- Determine and label the vanishing point.
- Show all construction lines.
- No hidden detail is required.
- Marks will be deducted for inaccuracy and untidiness. **[15]**




PP

PP

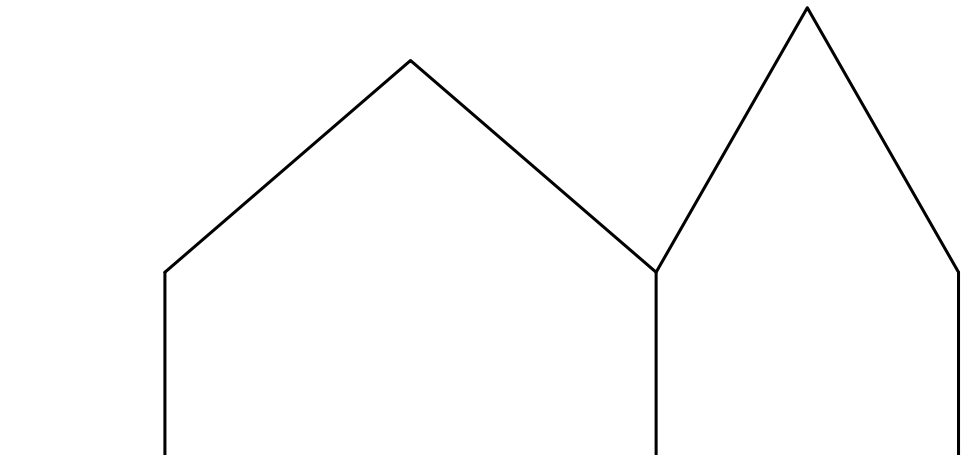
HL

HL



GL

GL



ASSESSMENT CRITERIA				
1	CONSTRUCTION	6		
2	BLOCK	9		
PENALTIES (-)				
TOTAL		15		

